

Year 2
Remote
Learning
Week 10

Stage 1 Remote Learning Week 10 - Year 2

Task	Monday	Tuesday	Wednesday	Thursday	Friday
	<p>Make your bed and tidy your room. Have a good breakfast.</p> <p>Check for an email from your teacher.</p>	<p>Make your bed and tidy your room. Have a good breakfast.</p> <p>Check for an email from your teacher.</p>	<p>Make your bed and tidy your room. Have a good breakfast.</p> <p>Check for an email from your teacher.</p>	<p>Make your bed and tidy your room. Have a good breakfast.</p> <p>Check for an email from your teacher.</p>	<p>Make your bed and tidy your room. Have a good breakfast.</p> <p>Check for an email from your teacher.</p>
English Tasks	<p>Comprehension Information report - Ladybirds</p> <p>Reading - Read a book from your shelf at home or your home reader for about 15 minutes</p> <p>Writing - Sentence a day worksheet</p>	<p>Comprehension Poetry - Ladybirds</p> <p>Reading - Read a book from your shelf at home or your home reader for about 15 minutes</p> <p>Writing - Sentence a day worksheet</p>	<p>Narrative A bug's point of view</p> <p>Reading - Read a book from your shelf at home or your home reader for about 15 minutes</p> <p>Writing - Sentence a day worksheet</p>	<p>Comprehension Information – The Platypus</p> <p>Reading - Read a book from your shelf at home or your home reader for about 15 minutes</p> <p>Writing - Sentence a day worksheet</p>	<p>Response Book Review - Revision – ing words</p> <p>Reading - Read a book from your shelf at home or your home reader for about 15 minutes</p> <p>Writing - Sentence a day worksheet</p>

Mathematics Tasks	Monday	Tuesday	Wednesday	Thursday	Friday
	<p>Maths – Fractions Each time you have something to eat today try cutting it into half – make sure you have 2 equal pieces</p> <p>Finish the Maths page for today in your booklet. Then... Mathletics</p>	<p>Maths – Fractions Each time you have something to eat today try cutting it into quarters – make sure you have 4 equal pieces</p> <p>Finish the Maths page for today in your Maths booklet. Then... Mathletics.</p>	<p>Maths - 2D Shapes Draw and label these shapes – circle, rectangle, square, hexagon, pentagon, octagon.</p> <p>Finish the Maths page for today in your booklet. Then... Mathletics</p>	<p>Geography – Cut and paste Geography activity from Ms Mateer</p> <p>Maths - Finish the Maths page for today in your booklet. Then... Mathletics</p>	<p>Finish the Maths page for today in your booklet. Then... Mathletics .</p>

Stage 1 Remote Learning Week 10

<p>Something Extra if you have time!</p>	<p>Creative Arts Do some dancing using Ms Mateers dance ideas sheet.</p>	<p>Science "WET, WET, WET" See attached sheets for instructions</p>	<p>Wellbeing Wednesday Listen to some music and do some colouring.</p>	<p>Physical Education Go for a ride on your bike or challenge someone to a game of soccer or handball.</p>	<p>IF WE GET TO HERE WE DEFINITELY DESERVE SOME FREE TIME AND A HOLIDAY !! GREAT JOB</p>
<p>Parent Signature</p>					



Does your statement have:

- Capital letters,
- full stops,
- spaces
- makes sense
- a subject
- a verb

Did you:

- use letter sounds to help you write words
- Hold your pencil the correct way


Self Assessment Emoji

How I feel about my work

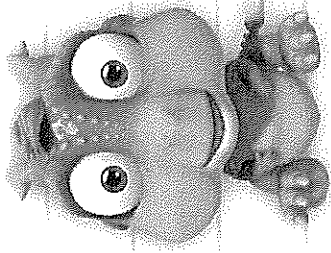
Peer Assessment Emoji

How my friend feels about my work

Write a sentence using this beginning: (then add another sentence)



The little dinosaur



Handwriting practice lines with a dashed midline and a solid bottom line. The top line is a solid line. The bottom line is a solid line. The midline is a dashed line.

Information Report

Name _____ Date _____

Ladybirds


Australia has around 300 species of ladybirds. They belong to the beetle family. Not all beetles can fly. Ladybirds fly using their hind wings.

Ladybirds are helpful to farmers and gardeners because they eat pests like aphids, scales and mites. They can eat up to 15 aphids in one day.

Ladybirds are brightly coloured, red, yellow and black. Their colouring is a warning to birds that they taste terrible and are poisonous. When they are frightened they produce bright yellow blood which scares off their enemies. Spiders, birds, frogs and other insects, are their enemies.

Write yes or no

- 1) All beetles can fly. _____
- 2) Ladybirds are helpful to farmers. _____
- 3) Ladybirds eat flies. _____
- 4) There are 30 species of ladybirds. _____
- 5) Ladybirds fly using their hind legs. _____
- 6) Spiders and frogs eat ladybirds. _____



Revision Term 2





9 Continue each pattern.


a 5, 10, 15, ,

b 2, 4, 6, ,

c 3, 6, 9, ,

10

a Draw what is below 

b Draw a leaf above the moon.

c Start at the star .

Move up 2 then left 1.

Draw a **X** where you land.

11 The bottle holds 3 cups.


How many cups in:

a 2 bottles?

b 3 bottles?



12 Match.



shorter than 1 metre longer than 1 metre

13




$\frac{1}{2}$ of 12 is

14 Join to the right spot on the line.

impossible will happen

A coin lands on heads.

15 Make a tally.



Colour	Tally	Total
orange		
blue		

16 Continue each pattern.

a 2, 4, 6,


b 5, 10, 15,

Poetry

Name _____ Date _____

Ladybird, Ladybird, fly away home

Ladybird, Ladybird,
Fly away home,
Your house is on fire
And your children all gone;
All except one
And her name is Ann,
And she has crept under
The pudding pan.



- Choose another insect or bug and change the poem by putting in different words. Draw a picture to illustrate your poem.

_____ / _____

Fly away _____,

Your _____ is on fire

And your _____ all gone;

All except one

And _____ name is _____,

And _____ has crept under

The _____.

Write a sentence using this beginning: (then add another sentence)





Does your statement have:

- Capital letters,
- full stops,
- spaces
- makes sense
- a subject
- a verb

Did you:

- use letter sounds to help you write words
- Hold your pencil the correct way



My best friend

Self Assessment Emoji

How I feel about my work

Peer Assessment Emoji

How my friend feels about my work


Multiplication – equal groups

You will need:  pencils

What to do:

Draw diagrams or pictures to help Farmer Joe solve these problems.

- a** Farmer Joe has 6 sheep in his paddock. Each sheep has 4 legs. How many legs are in his paddock?



- b** There are 7 chickens in the coop. Each chicken has 2 legs. How many legs are there in the coop?

- c** He plants 3 rows of carrots. Each row has 8 carrots. How many carrots are there?

- d** Farmer Joe lives in his house with his wife, 3 kids and his parrot, Lucky. How many legs are in the house?

Wet, Wet, Wet

WATER IS PRETTY IMPORTANT in the kitchen, but have you ever thought about the changes it goes through every day? Heat it up or cool it down, and some rather weird things start to happen.

Makes a change


For this experiment you hardly have to do a thing, just hang around the kitchen and you'll see how water goes through some pretty amazing transformations.

Heat up water enough and it turns into a gas called steam. The steam escapes into the air where it mixes with clouds and other moisture.



Steam

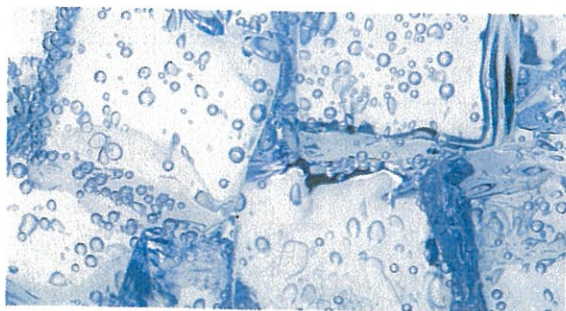
Watch the drips of a leaky tap. This is the liquid state in which we see water most often, although it only looks like this between a temperature of 0°C (32°F) and 100°C (212°F).



Water

Look in the freezer.

It's minus 15°C (5°F) or colder in there. At this temperature water turns to solid ice. That's why the Arctic Ocean has an ice lid on it for much of the year.




Ice

Light at the top

Did you know warm water is lighter than cold water? So if hot water weighs a tiny bit less than cold, does it float on top? You may get soaked with this experiment, but at least you'll get an answer.





 Find two jars exactly the same size. Fill one with hot water and add a drop of red food colouring. Fill the other with cold water and add blue food colouring. Fill up the jars until the water bulges over the rim.

Watery science
 Hot water is less dense than cold water, so it floats on top of it. That's because less dense things float on more dense ones. Lighter warm water always rises to the top of cold dense water. This is especially important in the sea since it helps currents to flow around the world.

Gently place a square piece of cardboard over the red jar so it seals in the water. Now you have to act quickly. Pick up the red jar and flip it upside down. If you get it right, the water will hold the cardboard in place. If you don't – you'll get soaked.



You may have to practise flipping the top jar a few times.



Put the red jar exactly on top of the blue jar, hold them together and get someone to ease the card out carefully. What happens? Try the same experiment, but with the blue jar on top. What happens to the colours this time?

Narrative

Name _____ Date _____

A Bug's Point of View

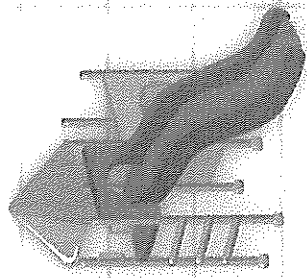

Word bank					
huge	tiny	bird	human	backyard	
enemy	sting	bite	bee	snail	butterfly
worm	spider	plants	ladybird	poisonous	

- Imagine you are a caterpillar living in a garden. Use some of the words in the word bank to help you write a story.

Early one Summer morning, I was in my garden slowly creeping around and munching on some juicy leaves when.....



Write a sentence using this beginning: (then add another sentence)



The playground

Does your statement have:

- Capital letters,
- full stops,
- spaces
- makes sense
- a subject
- a verb

Did you:

- use letter sounds to help you write words
- Hold your pencil the correct way

Self Assessment Emoji

How I feel about my work

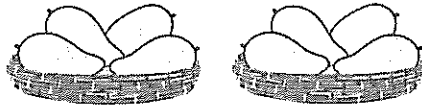
Peer Assessment Emoji

How my friend feels about my work

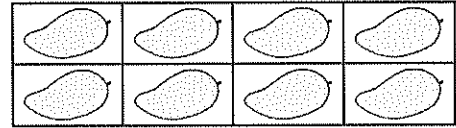
Multiplication – groups and arrays

We can arrange objects into **groups** or into **rows and columns**.


This is **2** groups of **4** mangoes.
There are **8** mangoes altogether.





This is **2** rows of **4** mangoes.
There are **8** mangoes altogether.





1 Look at the picture below. Help Tony work out the amounts of fruit and veggies he has in stock.


a 
 groups of is

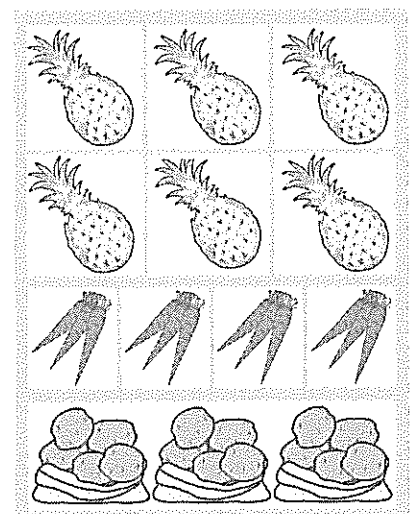

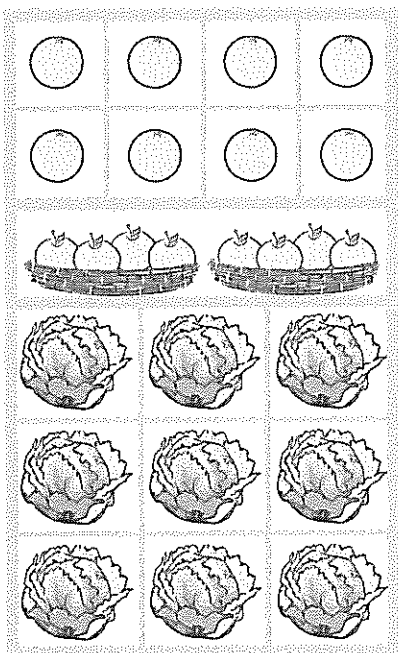
b 
 groups of is


c 
 groups of is

d 
 rows of is

e 
 rows of is

f 
 rows of is


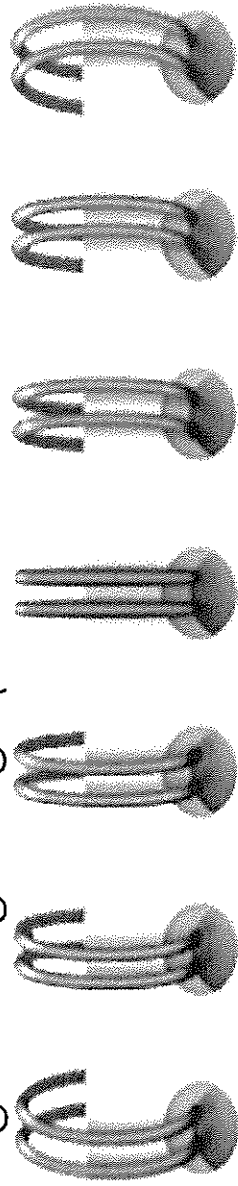




OWL



Write a sentence using this beginning: (then add another sentence)



The volcano

Does your statement have:

- Capital letters,
- full stops,
- spaces
- makes sense
- a subject
- a verb

Did you:

- use letter sounds to help you write words
- Hold your pencil the correct way

Self Assessment Emoji

How I feel about my work

Peer Assessment Emoji

How my friend feels about my work

Information Report

Name _____ Date _____

The Platypus

The platypus is a shy and unusual _____ called a monotreme.

It has a brown, waterproof _____ coat. The platypus _____ insect larvae and shrimps. It closes its eyes and nostrils when it _____ underwater. It has _____ feet. The tail stores fat and helps balance the platypus when it is in the water. The _____ has a large rubbery bill. The bill is covered with thousands of pores which are sensitive to touch and electric currents in the water. The female lays two _____ in her burrow in the creekbank. This unique Australian animal can be found on the 20 cent _____.



----- ✂ -----

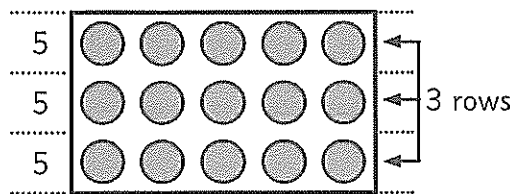
swims	mammal	eggs	webbed
eats	fur	coin	platypus

Multiplication – repeated addition

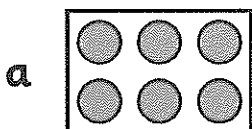
One way to describe multiplication is **repeated addition**. Look at this array.

There are 3 rows. There are 5 dots in each row. We can think of this as:

$$5 + 5 + 5 = 15$$

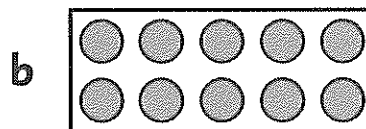


1 How many dots are in the array?



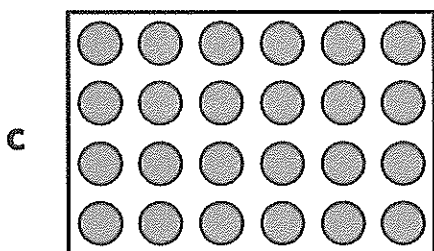
rows of is

+ =



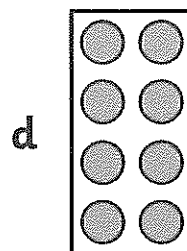
rows of is

+ =



rows of is

+ + + =



rows of is

+ + + =

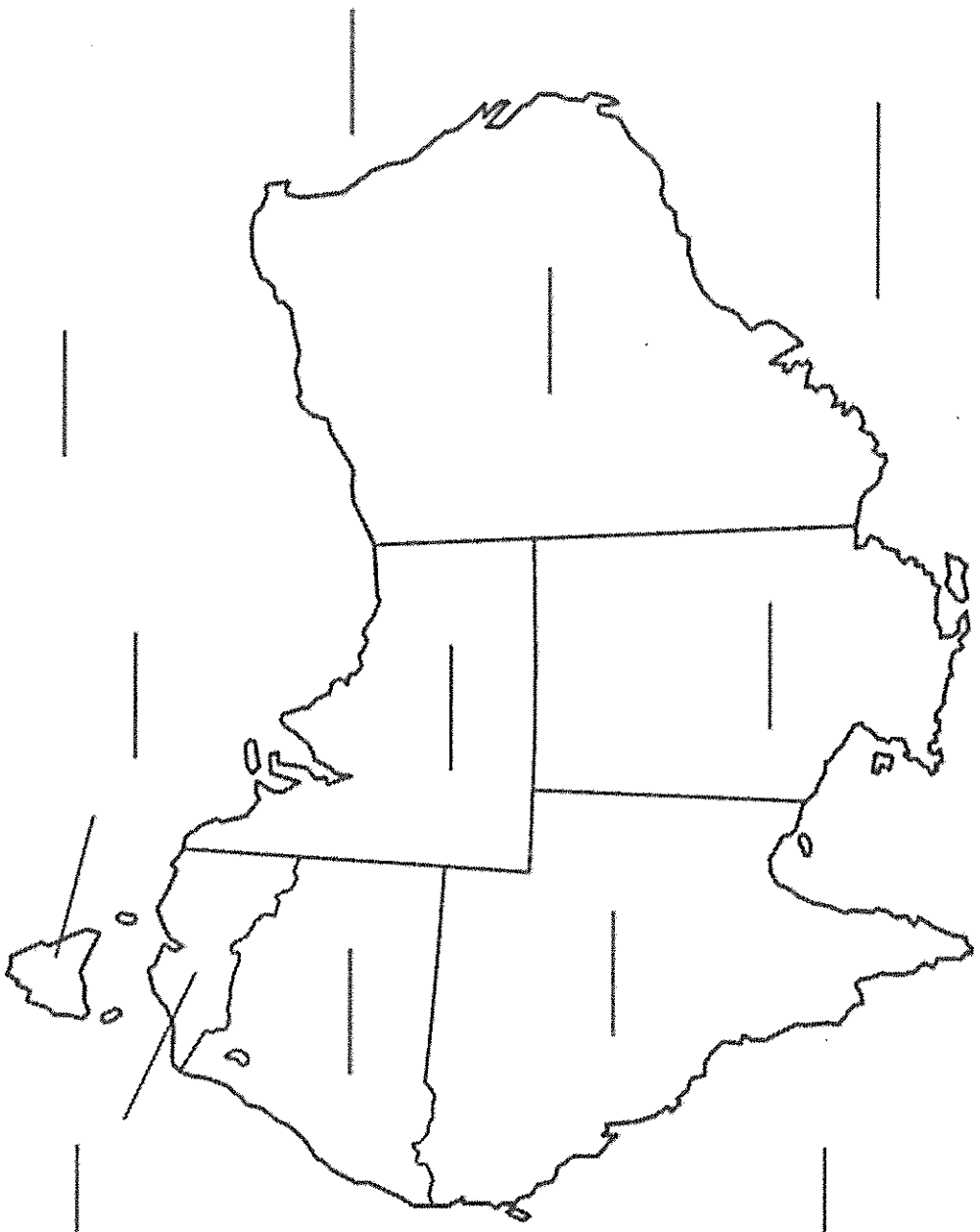
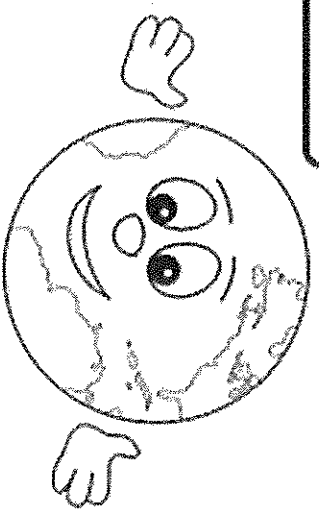
2 How many dogs are here? Record using repeated addition.



Geography with Ms Mateer

Name: _____

Color, Cut, Paste



Directions:
Step 1.) Color the Map of Australia. Color each state a different color. It is up to you if you would like to color the oceans blue.
Step 2.) Cut out the state and ocean labels.
Step 3.) Paste Labels in the correct spaces on the Map.

Map of Australia	Western Australia	Tasmania	Victoria	New South Wales	Queensland
South Australia	Southern Ocean	Northern Territory	Indian Ocean	Pacific Ocean	

Response

Name _____ Date _____

Book Review



Title: _____

Author: _____

Illustrator: _____

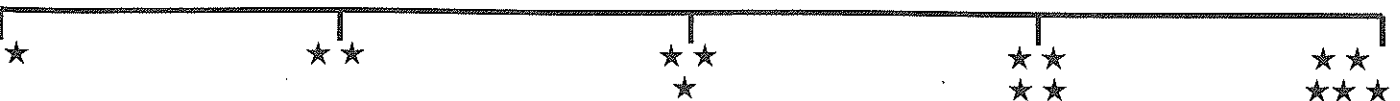
Main Characters: _____

• Draw pictures of 2 important events in the story and write a label for each.



• My opinion: _____

• Rating



Write a sentence using this beginning: (then add another sentence)



Does your statement have:

- Capital letters,
- full stops,
- spaces
- makes sense
- a subject
- a verb

Did you:

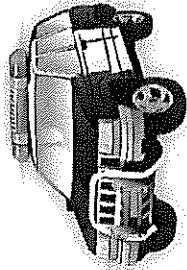

- use letter sounds to help you write words
- Hold your pencil the correct way

Self Assessment Emoji

How I feel about my work

Peer Assessment Emoji

How my friend feels about my work



The police car

Handwriting practice area with a dashed line for the word 'The police car' and several blank lines for writing a sentence.

